


MINUTE 15

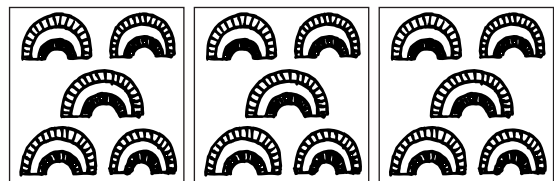
NAME _____

1. Write the fraction that names the shaded portions. _____



shaded portions
 portions in all


2. Multiply the numbers. $3 \times 5 =$



3.

There are _____ sets of two in 4. $4 \div 2 =$ _____

4. The line segment has two names. The names are _____ and \overline{BA} .



5. $3 + 2 + 2 =$

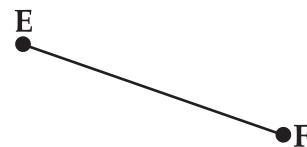
6. Circle how many quarts are in 1 gallon: 2 4 6

For questions 7–10, circle *line* or *line segment*.

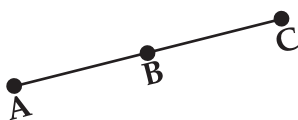
7. line line segment



8. line line segment



9. line line segment



10. line line segment

