





Name \_\_\_\_\_

## Count to One Hundred


Count the tens and ones. Write how many tens and ones. Then write how many in all.



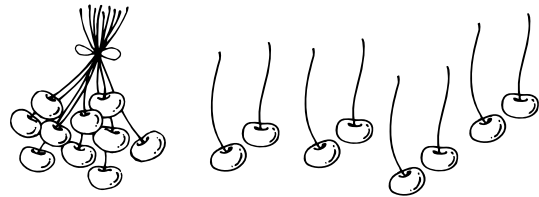
\_\_\_\_\_ = \_\_\_\_\_  
tens      ones




\_\_\_\_\_ = \_\_\_\_\_  
tens      ones




\_\_\_\_\_ = \_\_\_\_\_  
tens      ones



\_\_\_\_\_ = \_\_\_\_\_  
tens      ones



\_\_\_\_\_ = \_\_\_\_\_  
tens      ones



\_\_\_\_\_ = \_\_\_\_\_  
tens      ones