

Name: \_\_\_\_\_

Date: \_\_\_\_\_

# Number Riddles #1

Solve the number riddles. Circle the correct answers.

<p><b>A.</b> I have 1 ten and 6 ones. What number am I? 61      16</p>	<p><b>B.</b> I have 3 tens and 2 ones. What number am I? 32      23</p>
<p><b>C.</b> I have 9 ones and less than 4 tens. What number am I? 49      29</p>	<p><b>D.</b> I have 2 ones and more than 6 tens. What number am I? 72      52</p>
<p><b>E.</b> I have 8 tens and more than 7 ones. What number am I? 89      86</p>	<p><b>F.</b> I have 4 tens and less than 5 ones. What number am I? 47      43</p>
<p><b>G.</b> I have less than 7 ones and more than 5 tens. What number am I? 55      61</p>	<p><b>H.</b> I have more than 3 ones and less than 7 tens. What number am I? 88      56</p>
<p><b>I.</b> I have less than 5 tens and more than 4 ones. What number am I? 54      45</p>	<p><b>J.</b> I have more than 6 tens and less than 5 ones. What number am I? 33      91</p>

## Number Riddles #2

Solve the number riddles. Circle the correct answers.

**A.** Both my digits are even. The first digit is smaller than the second digit. The sum of my digits is 10. What number am I?

28      36

**B.** I am an even number. My second digit is two times my first digit. The sum of my digits is 12. What number am I?

48      24

**C.** The sum of my digits is an even number. My first digit is six less than my second digit. 12 is the number you get when you add my digits. What number am I?

17      39


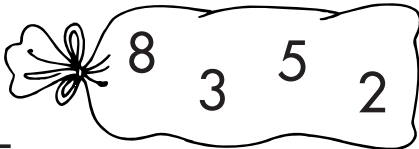
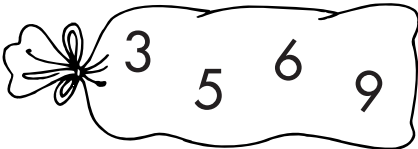
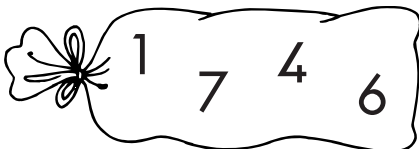
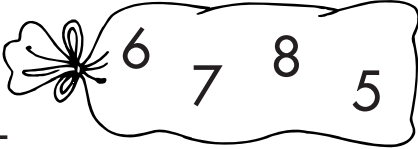
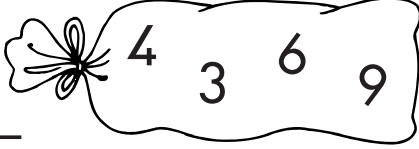
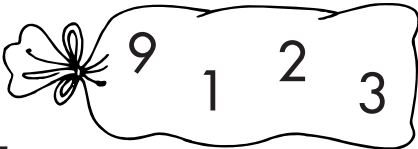
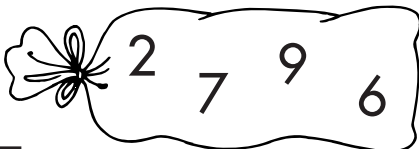
**D.** The sum of my digits is 9. My first digit is larger than my second digit. I am an odd number. What number am I?

63      54

Use similar clues to write your own number riddle in the box below.

# Number Riddles #3

Look at the numbers in each bag. Use them to write the numbers that match the clues. Do not use a number in a bag more than once.

<p><b>A.</b> The number is odd. It is greater than 45. It is less than 60.</p> <p>_____ </p>	<p><b>B.</b> The number is even. It is greater than 35. It is less than 50.</p> <p>_____ </p>
<p><b>C.</b> The number is even. It is greater than 55. It is less than 75.</p> <p>_____ </p>	<p><b>D.</b> The number is odd. It is greater than 40. It is less than 45.</p> <p>_____ </p>
<p><b>E.</b> The number is even. It is greater than 75. It is less than 85.</p> <p>_____ </p>	<p><b>F.</b> The number is odd. It is greater than 60. It is less than 65.</p> <p>_____ </p>
<p><b>G.</b> The number is odd. It is greater than 25. It is less than 30.</p> <p>_____ </p>	<p><b>H.</b> The number is even. It is greater than 60. It is less than 70.</p> <p>_____ </p>